



Second Grade Summer Mathematics Review #2

Name: \_\_\_\_\_

---

2-1 A teacher has 65 markers. Thirty of them are red and the rest are blue. How many blue markers does he have? Show your thinking.

---

2-2 Starting from left to right:

- A. Color the fifth square red.
- B. Color the third square blue.
- C. Color the ninth square green.

---

2-3 What is the number?

It is  $> 500$ .

It is  $< 900$ .

It has 5 ones.

There are 3 less tens than ones.

The number of hundreds is equal to the sum of the tens and ones.

\_\_\_\_\_ ANSWER

---

2-4 The answer to a question is 100. What might the question be?

---

2-5 Complete the patterns:

1. 50, 45, 40, 35, \_\_\_\_\_, \_\_\_\_\_, \_\_\_\_\_

2. 112, 110, 108, 106, \_\_\_\_\_, \_\_\_\_\_, \_\_\_\_\_

3.

Second Grade Summer Mathematics Review #3

Name: \_\_\_\_\_

---

---

3-1 Greg had 35 markers. He gave 19 to Ben. How many markers does Greg have now? Show your thinking using numbers, pictures, or words.

3-2 Starting from left to right:



Second Grade Summer Mathematics Review #5

Name: \_\_\_\_\_

---

---

5-1 Draw a line from the shape to the correct word.

cube

sphere

cylinder

---

---

5-2 Two classes are having relay races. There are 50 children altogether.

1. How many 5 person relay teams can be made? \_\_\_\_\_
2. How many 2 person relay teams can be made? \_\_\_\_\_

---

---

5-3 Which math fact does not belong in the group?

1. 
$$\begin{array}{r} 8 \\ + 7 \\ \hline 15 \end{array}$$

2. 
$$\begin{array}{r} 15 \\ - 7 \\ \hline 8 \end{array}$$

3. 
$$\begin{array}{r} 6 \\ + 8 \\ \hline 14 \end{array}$$

4. 
$$\begin{array}{r} 7 \\ + 8 \\ \hline 15 \end{array}$$

5. 
$$\begin{array}{r} 15 \\ - 8 \\ \hline 7 \end{array}$$

Why? \_\_\_\_\_

---

---

5-4 Draw a line of symmetry in each shape.

Second Grade Summer Mathematics Review #6

Name: \_\_\_\_\_ bTQ EMC /P <<> BDC q0.00000912 0 612 792 reW\*ñBT/F2 12 Tf1 0 0 1 50.4 744.36 Tm0 g 744.36 Tm0



Second Grade Summer Mathematics Review #8

Name: \_\_\_\_\_

8-1



Second Grade Summer Mathematics Review #9

Name: \_\_\_\_\_

---

---

9-1 Circle the shape that shows a line of symmetry.

A.

B.

---

---

9-2 Rachel has some pencils. Nicholas gives her 18 more. Now she has 42. How many pencils did Rachel start with? Show your thinking using numbers, pictures, or words.

---

---

9-3 What is one way that a rectangle and a rectangular prism are similar? What is one way that they are different?

---

---

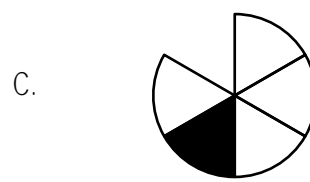
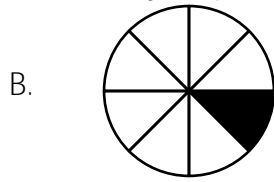
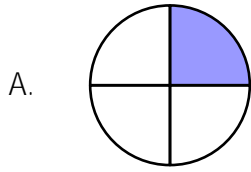
9-4 Mark saw 16 yellow birds and Ashley saw 15. How many yellow birds did they see together?

Name: \_\_\_\_\_

---

---

10-1 You would like  $\frac{1}{8}$  of a pizza. Circle your piece.



---

---

10-2 Circle the figure that is a cube. Explain your answer.

A.

B.

C.

D.

---

---

10-3 Mr. Jones has 84 goldfish in his pet store. He sells 21. About how many goldfish does he have left? Circle your answer.

About 60

About 40

---

---

10-4 A rectangular prism has how many faces? \_\_\_\_\_ edges? \_\_\_\_\_



---

---

10-5 Chris has 22 books. Ryan has 11 fewer books than Chris. How many books does Ryan have? Show your thinking.

## Second Grade Mathematics Summer Review

- 1-1 3 tens, 4 ones
- 1-2 17,10,13,18,11,12,12,16,16,10
- 1-3 Check student work
- 1-4 = =
- 1-5 59,61,69,71,73
  
- 2-1 35
- 2-2
- 2-3 725
- 2-4 Check student work
- 2-5 30,25,20  
104,102,100  
150,140,130
  
- 3-1 16 markers
- 3-2 heart, circle, smiley face, triangle
- 3-3 Check student work
- 3-4 Check student work
  
- 4-1 17 kites, 9 friends,